

EMMANUEL MISSION SR SEC SCHOOL, BEAWAR
ONLINE CLASSES
WEEK – 30 (12.10.2020)
CLASS – II

English: <https://youtu.be/JGNJ0muGUzU>

Hindi: <https://youtu.be/3h6Mn7sy33k>

Mathematics: Kindly see below

General Science: Kindly see below

Social Studies: Kindly see below

Computer Science: Kindly see below

General Knowledge: <https://youtu.be/S78OivNfpWo>

Physical Education: https://youtu.be/I_I-xa-4Xr8

Music (Guitar): https://youtu.be/kRAto_PAdIE

Music (Keyboard): <https://youtu.be/qwHaLN4oTs0>

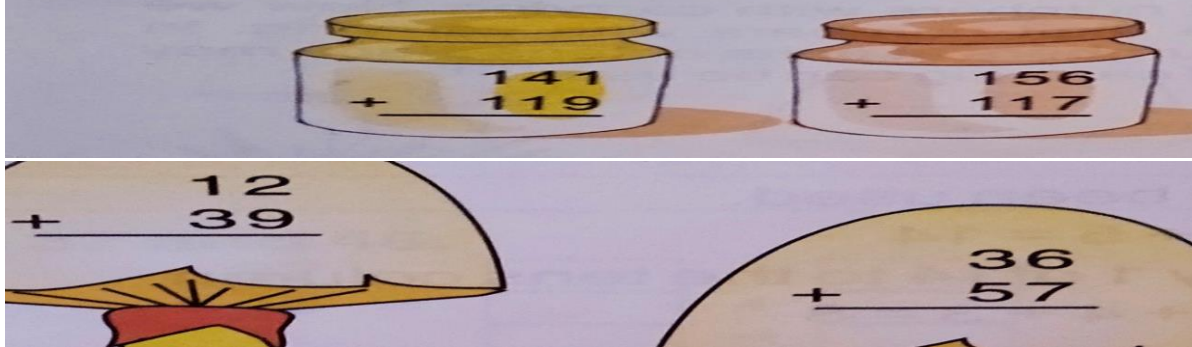
Health & Sanitation: <https://youtu.be/zSQtYLbCChk>

Art Education: <https://youtu.be/XI9pWwNovJw>

EMMANUEL MISSION SR SEC SCHOOL, BEAWAR
MATHEMATICS
CLASS – II
Self Assessment
Chapter - 5 Addition Of Numbers (With Carrying)

M.M – 10

Q.1 Add the following:



Q.2 Addition by regrouping :

<p>Add 37 and 48.</p> <div style="display: flex; justify-content: space-between;"><div>$37 =$</div><div><div style="border: 1px solid black; width: 20px; height: 20px;"></div></div><div>$+$</div><div><div style="border: 1px solid black; width: 20px; height: 20px;"></div></div></div> <div style="display: flex; justify-content: space-between;"><div>$48 =$</div><div><div style="border: 1px solid black; width: 20px; height: 20px;"></div></div><div>$+$</div><div><div style="border: 1px solid black; width: 20px; height: 20px;"></div></div></div> <div style="display: flex; justify-content: space-between; margin-top: 10px;"><div>$=$</div><div><div style="border: 1px solid black; width: 20px; height: 20px;"></div></div><div>$+$</div><div><div style="border: 1px solid black; width: 20px; height: 20px;"></div></div><div>$+$</div><div><div style="border: 1px solid black; width: 20px; height: 20px;"></div></div></div> <div style="display: flex; justify-content: space-between; margin-top: 10px;"><div>$=$</div><div><div style="border: 1px solid black; width: 20px; height: 20px;"></div></div><div>$+$</div><div><div style="border: 1px solid black; width: 20px; height: 20px;"></div></div><div>$+$</div><div><div style="border: 1px solid black; width: 20px; height: 20px;"></div></div></div> <div style="display: flex; justify-content: space-between; margin-top: 10px;"><div>$=$</div><div><div style="border: 1px solid black; width: 20px; height: 20px;"></div></div><div>$+$</div><div><div style="border: 1px solid black; width: 20px; height: 20px;"></div></div><div>$+$</div><div><div style="border: 1px solid black; width: 20px; height: 20px;"></div></div></div> <div style="display: flex; justify-content: space-between; margin-top: 10px;"><div>$=$</div><div><div style="border: 1px solid black; width: 20px; height: 20px;"></div></div><div>$+$</div><div><div style="border: 1px solid black; width: 20px; height: 20px;"></div></div><div>$+$</div><div><div style="border: 1px solid black; width: 20px; height: 20px;"></div></div></div> <div style="text-align: right; margin-top: 10px;">Ans.</div>
--

Q.3 There are 166 beans in a pot . Anand put 27 more. How many beans are there in the pot now ?

EMMANUEL MISSION SR SEC SCHOOL, BEAWAR
GENERAL SCIENCE
CLASS – II
Chapter -7 Safety First

A. Tick(□) the correct answers.

1. You should never play with

(a) pets (b) friends (c) sharp objects **Ans.sharp objects**

2. Always swim in the presence of a/an

(a) adult (b) friend (c) sister **Ans.adult**

3. Do not accept gifts or toffees from

(a) friends (b) strangers (c) your parents **Ans.strangers**

B. Colour Green for actions that are safe. Color Blue for actions that are unsafe.

1. Stay away from electrical wires. G
2. Jump on the desks in the class. B
3. If there is no footpath, walk facing the traffic. G
4. Play on the road. B
5. Carry an ID card when you go out. G

C. Rearrange the underline letters to get the correct word. Write them in the boxes.

1. Always AWKL on the footpath **WALK**
2. Cross the road only at the BRAZE crossing **ZEBRA**
3. Do not play with HSARP object **SHARP**
4. Do not play on the DOAR **ROAD**
5. Never ATLK to strangers. **TALK..**

D. Answer these questions.

1. Write two safety rules you should follow at home.

Ans. 1. Don't play with fire

2. Don't play with sharp object.

2. What can happen if you leave your toys on the floor.

Ans. Someone may trip over them.

3. Write two safety rules you should follow in school.

Ans. 1. never jump on the desks and chairs.

2. Do not throw things at your classmates.

4. What can happen if you stand in front of a moving swing.

Ans. We may get hurt.

4. What is first aid.

Ans. The immediate help given to an injured person.

EMMANUEL MISSION SR SEC SCHOOL, BEAWAR
SOCIAL STUDIES
CLASS – II
CHAPTER 5 & 6 ASSIGNMENT

I. Fill in the blanks. Choose words from the box.

(permanent , not , tent , igloos)

1. Eskimos live in
2. Pucca houses are houses.
3. Kutcha houses areexpensive.
4. A is a temporary house made of cloth.

II. Circle the correct words

1. A good house is a clean / unclean house.
2. A Caravan is a stationary / mobile house.

III. Write Yes or No

1. Sunlight helps to kill germs.
2. Always keep things at their proper places.

IV. Match the following.

1. Architect : taps
2. Mason : wires
3. Plumber : wood
4. Electrician : plan






V. Answer the following questions

1. What type of a house is a healthy house ?
2. Name three ways to clean the house ?
3. Where should the garbage be thrown ?
4. Why should a house have doors and windows ?

EMMANUEL MISSION SR SEC SCHOOL, BEAWAR
COMPUTER
CLASS – II

Self Assessment : Evaluation Sheet – 1

Match the name of computer part with the pictures correctly. Marks: 5

	Pen Drive		
	CPU box		
	UPS		
	Joystick		
	Headphone		